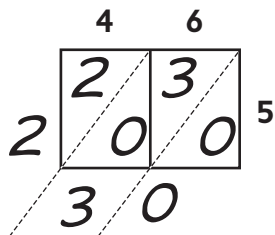


Lattice Multiplication

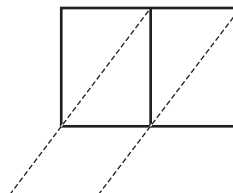
Use the lattice method to find the products.



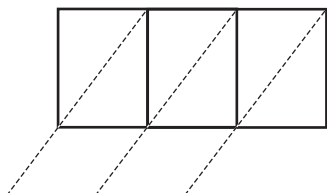
Example $5 * 46 = \underline{230}$



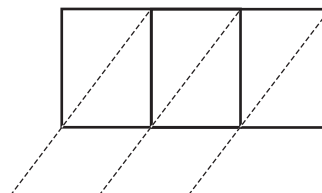
① $8 * 67 = \underline{\hspace{2cm}}$



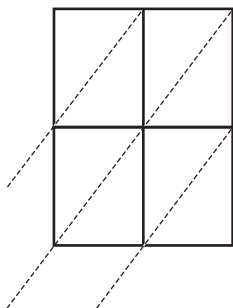
② $7 * 836 = \underline{\hspace{2cm}}$



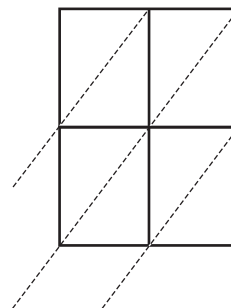
③ $6 * 531 = \underline{\hspace{2cm}}$



④ $44 * 58 = \underline{\hspace{2cm}}$



⑤ $84 * 78 = \underline{\hspace{2cm}}$



Practice

⑥ $77 * 8 = \underline{\hspace{2cm}}$

⑦ $49 * 2 = \underline{\hspace{2cm}}$

⑧ $89 * 4 = \underline{\hspace{2cm}}$

⑨ $183 * 5 = \underline{\hspace{2cm}}$