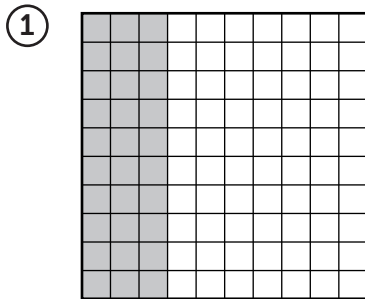


Representing Fractions and Decimals



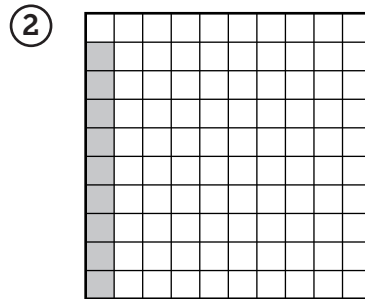
If the grid is the whole, then what part of each grid is shaded?

Write a fraction and a decimal below each grid.



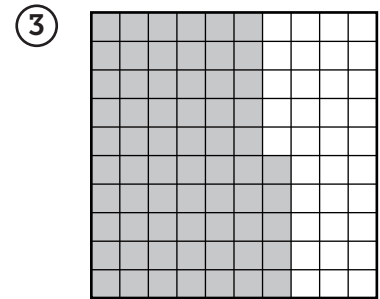
fraction: _____

decimal: _____



fraction: _____


decimal: _____



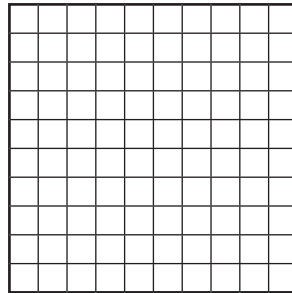
fraction: _____

decimal: _____

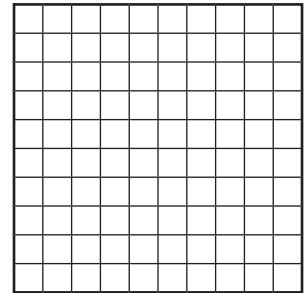
④ Color 0.8 of the grid.



⑤ Color 0.04 of the grid.



⑥ Color 0.53 of the grid.



Practice

⑦ The numbers 81, 27, and 45 are all multiples of 1, _____, and _____.

⑧ List the first ten multiples of 6.

_____, _____, _____, _____, _____, _____, _____, _____,
 _____, _____