

Name : \_\_\_\_\_


Score : \_\_\_\_\_

Teacher : \_\_\_\_\_

Date : \_\_\_\_\_


Draw Angle A to the Nearest Degree.

1 )



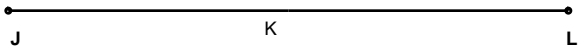
Angle A = 117°

2 )



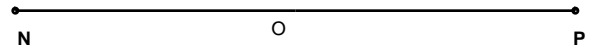
Angle A = 139°

3 )



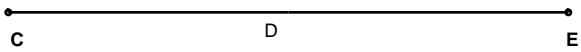
Angle A = 125°

4 )



Angle A = 152°

5 )



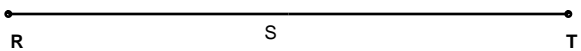
Angle A = 145°

6 )



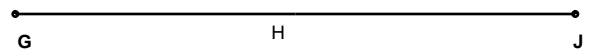
Angle A = 34°

7 )



Angle A = 116°

8 )



Angle A = 65°



Name : \_\_\_\_\_

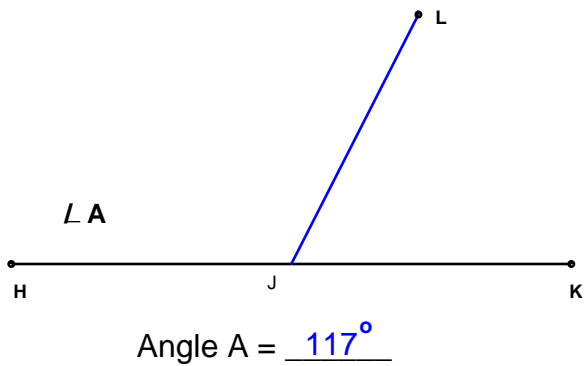
Score : \_\_\_\_\_

Teacher : \_\_\_\_\_

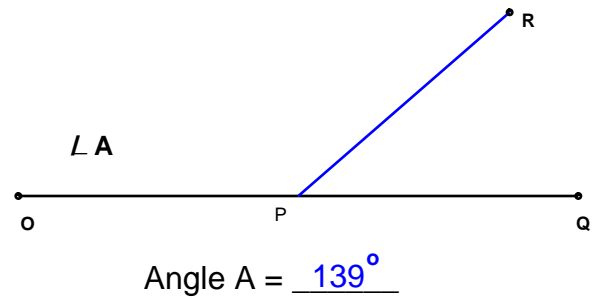
Date : \_\_\_\_\_

Draw Angle A to the Nearest Degree.

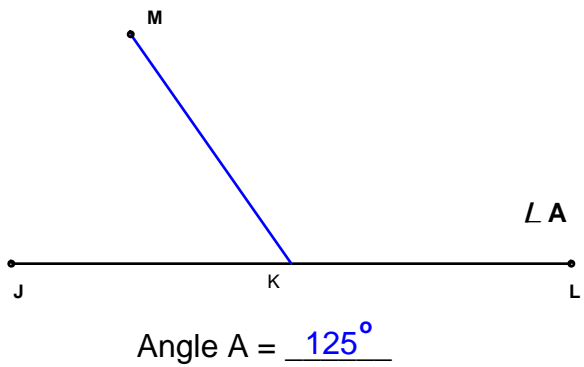
1 )



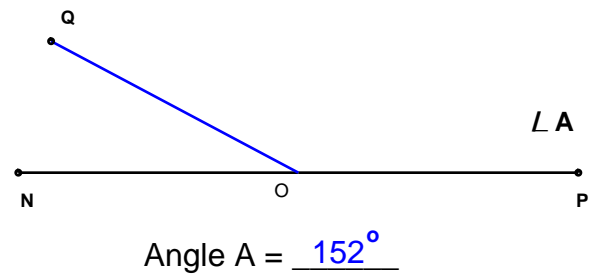
2 )



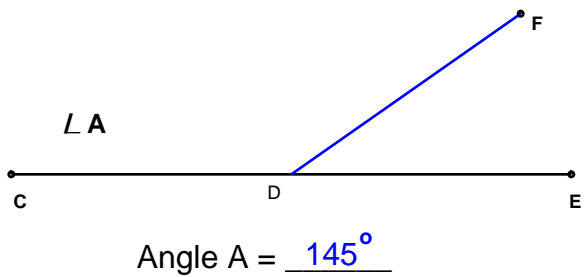
3 )



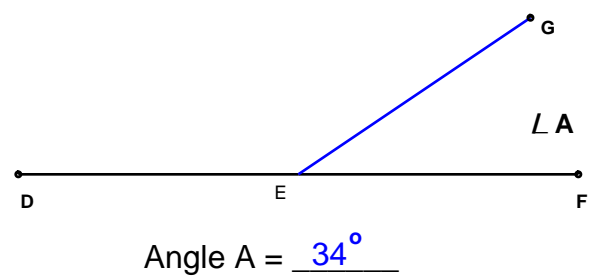
4 )



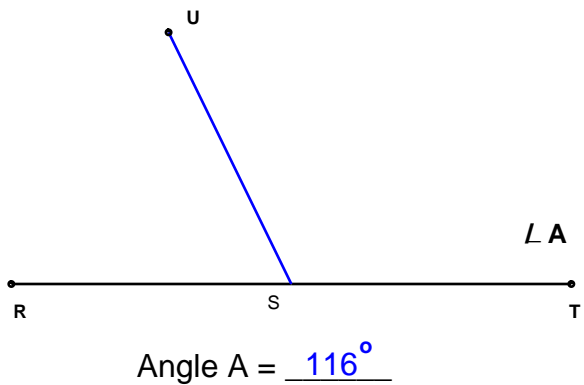
5 )



6 )



7 )



8 )

